


zadanie 1

zadanie 2

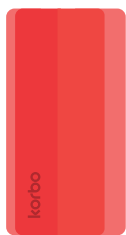
zadanie 3



$$= 3$$

2


7



$$= 7$$

8


4



$$= 2$$

4


1



$$= 1$$

1

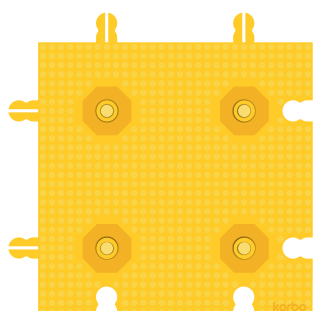
2



$$= 5$$

3

3



$$= 4$$

5

8